
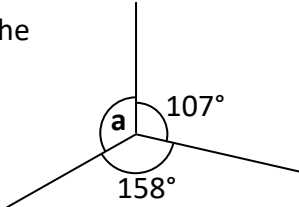
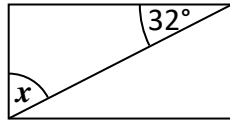


Name: _____

Date: _____

Class/Group: _____

A: Place Value, Add and Subtract		B: Multiply, Divide and Fractions		C: Geometry and Problem Solving	
1. What is the value of the 1 in this number? 7,186,354	5:1	11. Circle all the multiples of 25. 5 40 75 100	5:8	21. A race track is 2.654 kilometres in length. In a race, cars much do 3 laps. How long is the race?	5:18
2. Write three hundred and ten thousand, five hundred in digits.	5:1	12. Circle the composite (non-prime) numbers? 21 23 32 37 43	5:9	22. Which of these is the largest? a. 0.85 b. $\frac{7}{10}$ c. 65%	5:19
3. Round 596,147 to the nearest hundred thousand .	5:2	13. 2,169 ÷ 3	5:10		
4. What is the missing number? 500,350 600,350 <input type="text"/> 800,350	5:2	14. 0.205 x 10	5:11	23. Draw an angle of 125°.	5:25
5. Find the difference in temperatures. <input type="text"/> London 0°C <input type="text"/> Glasgow -3°C	5:3	15. Complete this sequence of cube numbers . 1 <input type="text"/> 27 64	5:12		
6. Write this number in Roman Numerals: 612	5:4	16. Write <, = or > to make this correct: $\frac{6}{10}$ <input type="text"/> $\frac{21}{40}$	5:13		
7. 24,148 – 16,200 =	5:5	17. Find an equivalent fraction of $\frac{45}{100}$. 	5:14	24. Calculate the missing angle labelled a : 	5:26
8. 137,449 + 25,658 =	5:5	18. Write $3\frac{7}{15}$ as an improper fraction .	5:15		
9. Complete this sum without written working. 38,700 + 11,300 =	5:6	19. $\frac{3}{9} \times 45 =$	5:16	25. A diagonal has been drawn through this rectangle. Calculate the angle labelled x . 	5:27
10. 17,293 seats out of 25,000 are taken. How many are empty?	5:7	20. Round 3.19 to the nearest whole number.	5:17		
Total (A)		Total (B)		Total (C)	
Test Total (A+B+C)		R (0-9)		Y (10-19)	
				G (20-25)	